

$$(x+5)^2 \quad (x+5)(x+5)$$

$$x^2 + 10x + 25$$

$$2^2$$

$$2 \cdot 2$$

$$(4 - \sqrt{12})^2$$

$$(4 - \sqrt{12})(4 - \sqrt{12}) = 16 - 4\sqrt{12} - 4\sqrt{12} + 12$$

$$28 - 8\sqrt{12}$$

$$(4x)^2$$

$$4x \cdot 4x$$

$$(3 + 2i)^2$$

$$(3 + 2i)(3 + 2i)$$

$$28 - 16\sqrt{3}$$

$$9 + 6i + 6i + 4i^2$$

$$9 + 12i + 4(-1)$$

$$5 + 12i$$



Unit 4 Quadratics

10/29

Quadratic Functions

- Any function that can be written in the form

Standard
form

$$f(x) = ax^2 + bx + c$$

$$a \neq 0$$

Put in Standard Form and find a, b, and c

$$x^2 + 6x = -8$$

$$x^2 + 6x + 8 = 0$$

$$a=1 \quad b=6 \quad c=8$$

$$4x^2 = 13$$

$$4x^2 - 13 = 0$$

$$a=4 \quad b=0$$

$$c=-13$$

$$3x = -2x^2 - 6$$

$$0 = -2x^2 - 3x - 6$$

$$a=-2 \quad b=-3$$

$$c=-6$$

$$(x-3)(2x+4) = 0$$

$$2x^2 - 2x - 12 = 0$$

$$a=2 \quad c=-12$$

$$b=-2$$

FOIL
Simplify

Is it quadratic?

1. $y = x + 4$ NO, it's linear

2. $y = 2x^2 - (3x - 5)$ Yes, the highest exponent is 2
 $2x^2 - 3x + 5$

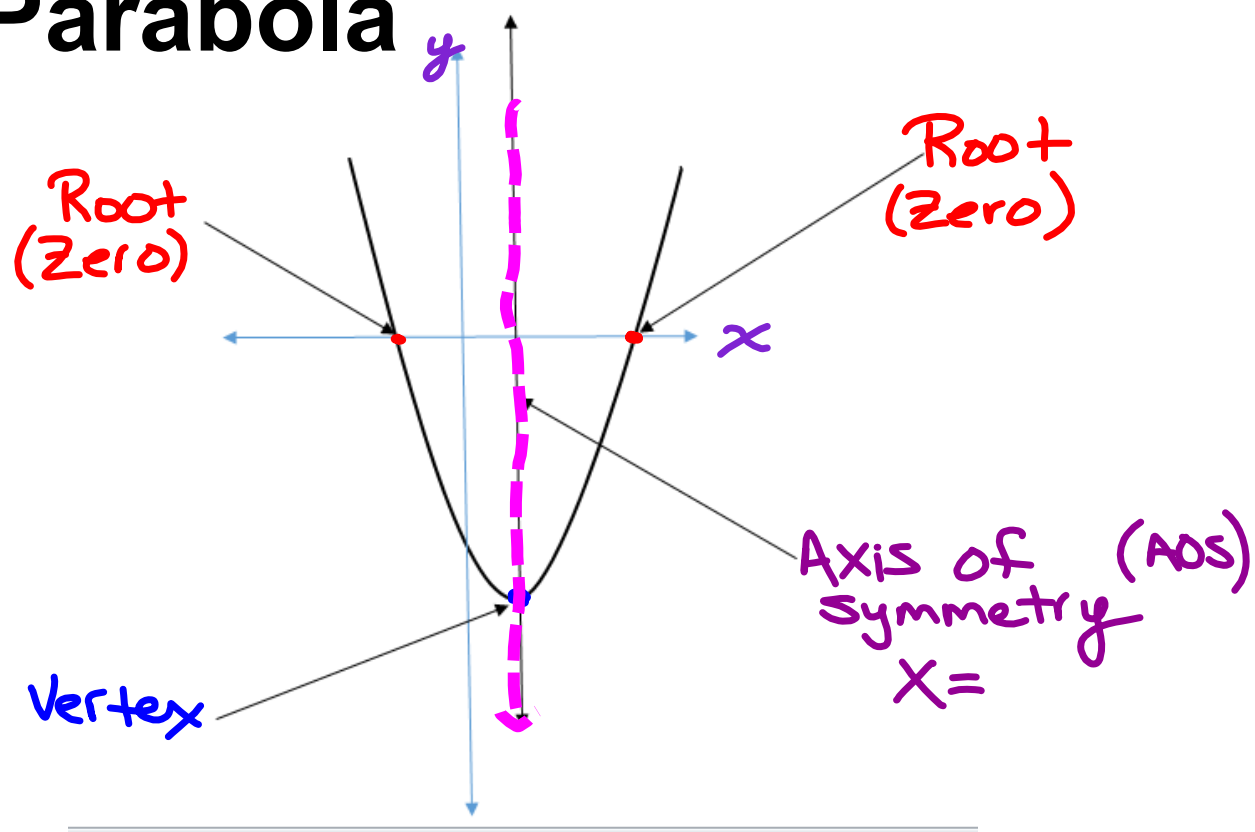
3. $y = 3x(x - 2)$ yes
 $3x^2 - 6x$

4. $g(x) = -7(x - 4)$ No
 $-7x + 28$

5. $h(x) = (3x)(2x) + 6$

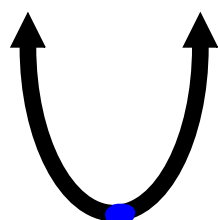
6. $y = x(1 - x) - (1 - x^2)$

Parabola



Quadratic Functions

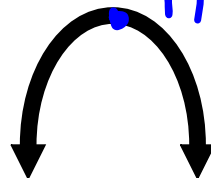
Graph forms a parabola



concave up

Minimum

or



Maximum

concave down

Maximum & Minimum are terms that are used to describe the vertex

Determine whether a parabola opens up or down

Given $f(x) = ax^2 + bx + c$,

if $a > 0$, then the parabola is concave up and has a minimum

Positive

if $a < 0$, then the parabola is concave down and has a maximum

Negative

Up or Down?
Max or Min?

• $y = 3x^2 + 2x - 3$
↻
Concave up
min

• $f(x) = 28 - 7x^2$ $a = -7$
Concave down
max

• $g(x) = x(2 - x) - (1 - 2x^2)$
 $= 2x - x^2 - 1 + 2x^2$
 $= x^2 + 2x - 1$

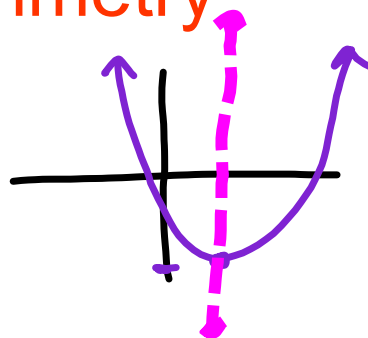
Concave up
min

To find the axis of symmetry

- When $f(x) = ax^2 + bx + c$

Aos: $x = -\frac{b}{2a}$

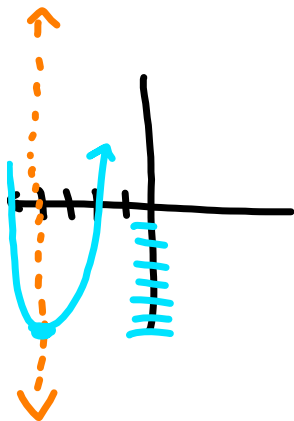
vertex: plug x value in and solve for y



Find the vertex and los

$$f(x) = x^2 + 8x + 9$$

Concave up
min



AOS

$$x = \frac{-b}{2a}$$

$a=1$
 $b=8$
 $c=9$

$$x = \frac{-8}{2(1)} = -\frac{8}{2}$$

$$x = -4$$

① Identify $a, b, \& c$

② Plug into $x = \frac{-b}{2a}$

③ Simplify

Vertex

$$y = x^2 + 8x + 9$$

$$y = (-4)^2 + 8(-4) + 9$$

$$y = 16 - 32 + 9$$

$$y = -7$$

$$\text{Vertex } (-4, -7)$$

$x = -4$
AOS

min = -7

④ Plug the AOS into the orig. eq.

⑤ Simplify & write the ans as an ordered pair